



**GEOGRAPHY
HIGHER LEVEL AND STANDARD LEVEL
PAPER 2 - RESOURCES BOOKLET**


Friday 14 November 2003 (morning)

INSTRUCTIONS TO CANDIDATES









- Do not open this resources booklet until instructed to do so.
- Use the resources as appropriate to the questions in paper 2.

C11. Topographic mapping

The map extract (scale : 1:50 000) and the aerial photograph show an area of rugged terrain and a highly indented coastline in the north west of Ireland.



© Ordnance Survey Ireland and Government of Ireland.

-  Caravan Site (transit)
-  Hostel An Óige/Independent
-  Parking
-  Picnic Site
-  Public Telephone
-  Camping Site
-  Tourist Information (regular opening)
-  Tourist Information Centre (restricted opening)



SCALE 1 : 50 000

1 KILOMETRES 0 1 2 3 4 5 6 7 8 9 10 KILOMETRES

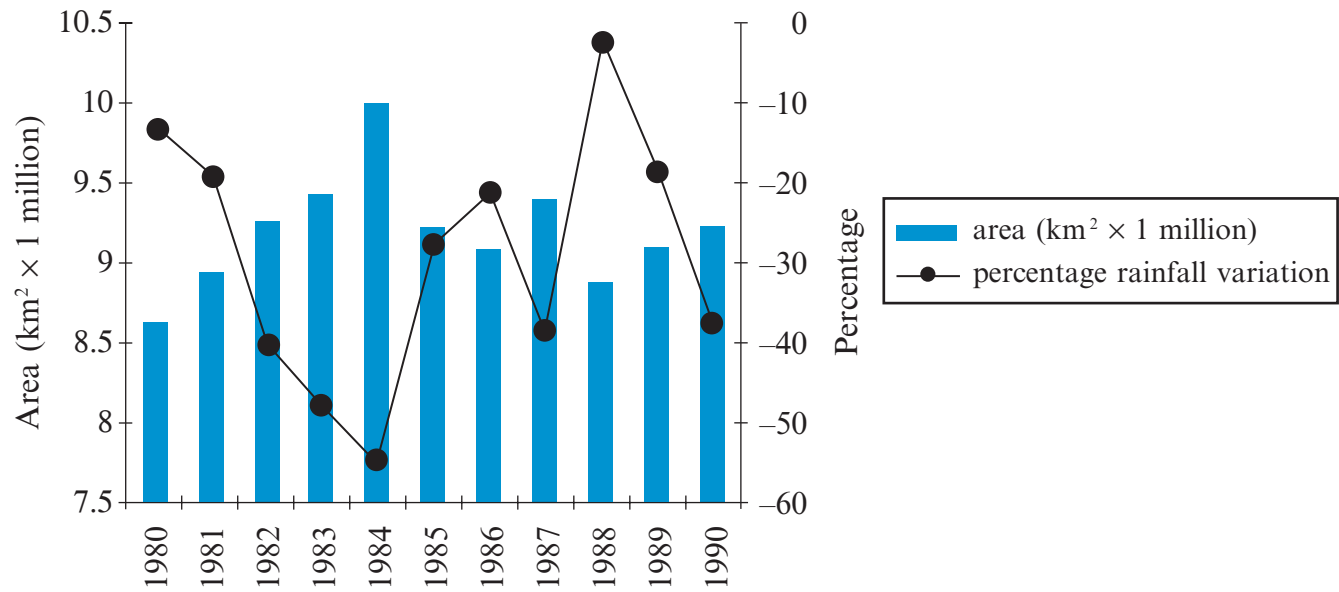
1 STATUTE MILES 0 1 2 3 4 5 6 STATUTE MILES

- Viewpoint
- Nature Reserve
- National Trust
- Motoway (Junction)
- National Primary Road
- National Secondary Road
- Dual Carriageway
- Regional Road
- Third Class Road
- Other Roads
- Track
- Built Up Area
- Airport
- Airfield
- Post Office
- Police
- Power Station (Hydro)
- Power Station (Fossil)
- Electricity Transmission Line
- TV Mast
- Church or Chapel
- Cathedral
- Triangulation Pillar
- Graticule Intersection
- Golf Course or Links
- Waymarked Walks; Unmarked
- Ferry (Vehicle)
- Ferry (Passenger)
- Railways
- Industrial Line
- Tunnel
- Level Crossing
- Station
- International Boundary
- County Boundary
- National Park
- Forest Park
- Dept. of Defence Property
- Coniferous Plantation
- Natural Woodland
- Mixed Woodland
- Named Antiquities
- Enclosure (e.g. Ringfort)
- Battlefield (with date)
- 10m Contour Interval
- 50m Contour Interval
- Spot Height
- Lake
- Canal, Canal (dry)
- River or Stream
- Boating Activities
- Lighthouse in use/disuse
- High Water Mark
- Low Water Mark
- Beach

A3. Arid environments and their management

(b) Structured question

The diagram below shows the changes in the area of the Sahara (in km²) from 1980 to 1990 and the percentage rainfall variation from the mean for the same period.

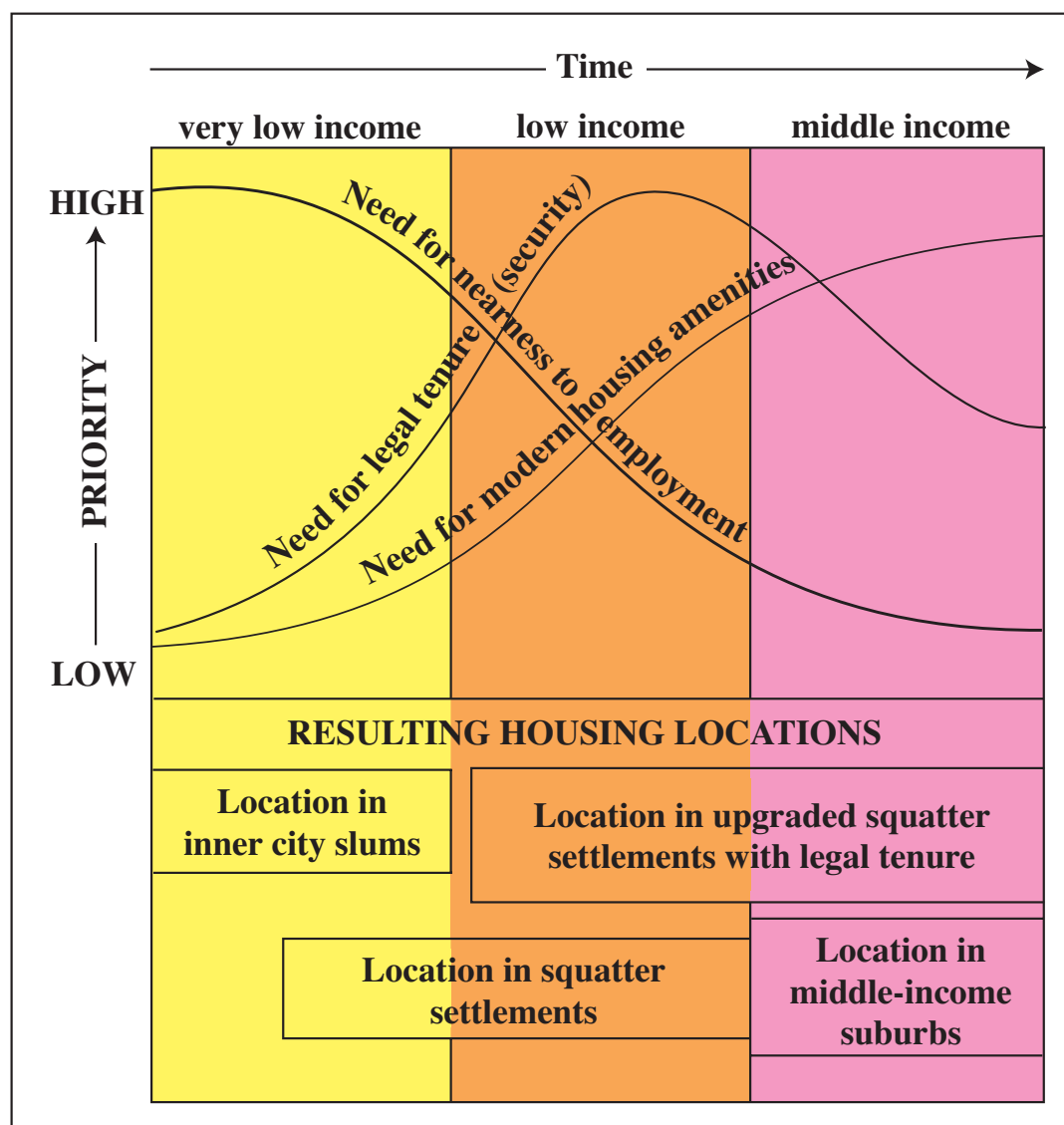


[Source: <http://ag.arizona.edu/~lmilich/bound.html>]

B8. Settlements

(b) Structured question

The diagram below shows a model of housing priorities for low income families in less economically developed countries (LEDCs).



[Source : Adapted from Turner's model in *Study and Revise* (2000)]